



# Home Learning Term 1

Complete one task each week and post on Google Classroom or complete at home and bring it in to share with us.

## Science/English

Find a recent television or news paper clip about a 'natural disaster' and summarise your findings by creating a fact file.



Perhaps read and complete this quiz too!  
(See link below)

## Art

Sketch your favourite scene in your local environment.



## Geography/Mindfulness

Take a walk in your local environment - record in pictures, photographs, or words what you see.

If you complete the learning sheet attached it might help you with your map skills.



## English/History

Interview a relative, neighbour or friend who knows something about the local history of the area. Record your findings in whatever way you like.



## Maths

In our maths learning we will be looking at additions. See if you can complete any of the 'Adding Tables' attached. Perhaps you could do a survey and create your own table. You could even write some subtraction questions!



## RE/Speaking and Listening

Think of a story in the Bible that has a "disaster" in, act the story out either yourself or using toys and objects.



## DT

Create a model of your favourite building in the local area.



What can you find out about it?

## Mindfulness

Relax and enjoy some time with your family. Go to the park, play a game, talk about what you have done at school.



[https://softschools.com/language\\_arts/reading\\_comprehension/science/455/natural\\_disasters/](https://softschools.com/language_arts/reading_comprehension/science/455/natural_disasters/)

### Worksheet 1

1. Complete the passage below by drawing in the correct map symbol after the underlined word. You must research the actual OS map symbol for each feature to ensure the symbol you draw in is correct.

"I sat by the river just where it joined the lake. It was very wet and marshy. In the distance I could see a main road. There was a Public House and parking was available. Behind me there was a lovely orchard. What a pity that it was going to be knocked down and turned into a large Golf Course. I could also see a railway line. I decided my visit was now over and it was time to return to the coach station, just over the hill by the coniferous woods.

2. Now make up your own short story like the one above in the box below. You must include at least 10 map symbols in your writing and include the correct OS map symbol for each. You can include more than 10 if you like, but your story must make sense.

# Cracking Crisps A

	<b>Cheese and Onion</b>	<b>Ready Salted</b>	<b>Salt and Vinegar</b>	<b>Quavers</b>	<b>Wotsits</b>
<b>Monday</b>	<b>12</b>	<b>10</b>	<b>20</b>	<b>25</b>	<b>15</b>
<b>Tuesday</b>	<b>5</b>	<b>12</b>	<b>13</b>	<b>14</b>	<b>20</b>
<b>Wednesday</b>	<b>4</b>	<b>15</b>	<b>9</b>	<b>11</b>	<b>30</b>
<b>Thursday</b>	<b>13</b>	<b>7</b>	<b>22</b>	<b>17</b>	<b>10</b>
<b>Friday</b>	<b>13</b>	<b>10</b>	<b>12</b>	<b>15</b>	<b>19</b>

1. How many Cheese and Onion and Ready Salted crisps were sold on Monday?
2. How many Quavers and Wotsits were sold on Tuesday?
3. How many Salt and Vinegar and Quavers were sold on Thursday?
4. How many Wotsits were sold on Wednesday and Thursday?
5. How many Salt and Vinegar crisps were sold in the final 3 days of the week?
6. How many Cheese and Onion crisps were sold on Thursday and Friday?
7. How many Quavers were sold on Thursday and Friday?
8. How many Ready Salted Crisps were sold on Monday Tuesday and Wednesday?
9. How many Cheese and Onion were sold in the whole week?
10. How many Wotsits were sold on Monday and Friday?

# Cracking Crisps B

	<b>Cheese and Onion</b>	<b>Ready Salted</b>	<b>Salt and Vinegar</b>	<b>Quavers</b>	<b>Wotsits</b>
<b>Monday</b>	<b>12</b>	<b>10</b>	<b>20</b>	<b>25</b>	<b>15</b>
<b>Tuesday</b>	<b>5</b>	<b>12</b>	<b>13</b>	<b>14</b>	<b>20</b>
<b>Wednesday</b>	<b>4</b>	<b>15</b>	<b>9</b>	<b>11</b>	<b>30</b>
<b>Thursday</b>	<b>13</b>	<b>7</b>	<b>22</b>	<b>17</b>	<b>10</b>
<b>Friday</b>	<b>13</b>	<b>10</b>	<b>12</b>	<b>15</b>	<b>19</b>

1. How many more Cheese and Onion crisps were sold on Monday than Tuesday?
2. How many more Quavers were sold on Tuesday than Wednesday?
3. How many more Wotsits were sold on Wednesday than Tuesday?
4. How many more Salt and Vinegar crisps were sold on Monday than Friday?
5. How many more Quavers than Cheese and Onion were sold on Monday?
6. How many more Salt and Vinegar than Cheese and Onion were sold on Thursday?
7. How many less Cheese and Onion than Ready Salted were sold on Wednesday?
8. How many less Salt and Vinegar than Ready Salted were sold on Wednesday?
9. How many less Cheese and Onion than Quavers were sold on Monday?
10. How many less Salt and Vinegar than Wotsits were sold on Wednesday?

# Cracking Crisps A

	<b>Cheese and Onion</b>	<b>Ready Salted</b>	<b>Salt and Vinegar</b>	<b>Quavers</b>	<b>Wotsits</b>
<b>Monday</b>	<b>8</b>	<b>10</b>	<b>18</b>	<b>20</b>	<b>15</b>
<b>Tuesday</b>	<b>5</b>	<b>12</b>	<b>13</b>	<b>14</b>	<b>13</b>
<b>Wednesday</b>	<b>4</b>	<b>15</b>	<b>9</b>	<b>11</b>	<b>17</b>
<b>Thursday</b>	<b>13</b>	<b>7</b>	<b>22</b>	<b>17</b>	<b>10</b>
<b>Friday</b>	<b>13</b>	<b>10</b>	<b>12</b>	<b>15</b>	<b>19</b>

1. How many Cheese and Onion and Ready Salted crisps were sold on Monday?
2. How many Quavers and Wotsits were sold on Tuesday?
3. How many Salt and Vinegar and Quavers were sold on Thursday?
4. How many Wotsits were sold on Wednesday and Thursday?
5. How many Salt and Vinegar crisps were sold in the final 3 days of the week?
6. How many Cheese and Onion crisps were sold on Thursday and Friday?
7. How many Quavers were sold on Thursday and Friday?
8. How many Ready Salted Crisps were sold on Monday Tuesday and Wednesday?
9. How many Cheese and Onion were sold in the whole week?
10. How many Wotsits were sold on Monday and Friday?

# Cracking Crisps B

	<b>Cheese and Onion</b>	<b>Ready Salted</b>	<b>Salt and Vinegar</b>	<b>Quavers</b>	<b>Wotsits</b>
<b>Monday</b>	<b>8</b>	<b>10</b>	<b>18</b>	<b>20</b>	<b>15</b>
<b>Tuesday</b>	<b>5</b>	<b>12</b>	<b>13</b>	<b>14</b>	<b>13</b>
<b>Wednesday</b>	<b>4</b>	<b>15</b>	<b>9</b>	<b>11</b>	<b>17</b>
<b>Thursday</b>	<b>13</b>	<b>7</b>	<b>22</b>	<b>17</b>	<b>10</b>
<b>Friday</b>	<b>13</b>	<b>10</b>	<b>12</b>	<b>15</b>	<b>19</b>

1. How many more Cheese and Onion crisps were sold on Monday than Tuesday?
2. How many more Quavers were sold on Tuesday than Wednesday?
3. How many more Wotsits were sold on Wednesday than Tuesday?
4. How many more Salt and Vinegar crisps were sold on Monday than Friday?
5. How many more Quavers than Cheese and Onion were sold on Monday?
6. How many more Salt and Vinegar than Cheese and Onion were sold on Thursday?
7. How many less Cheese and Onion than Ready Salted were sold on Wednesday?
8. How many less Salt and Vinegar than Ready Salted were sold on Wednesday?
9. How many less Cheese and Onion than Quavers were sold on Monday?
10. How many less Salt and Vinegar than Wotsits were sold on Wednesday?

# Cracking Crisps A

	<b>Cheese and Onion</b>	<b>Ready Salted</b>	<b>Salt and Vinegar</b>	<b>Quavers</b>	<b>Wotsits</b>
<b>Monday</b>	<b>120</b>	<b>100</b>	<b>200</b>	<b>250</b>	<b>150</b>
<b>Tuesday</b>	<b>50</b>	<b>120</b>	<b>130</b>	<b>140</b>	<b>200</b>
<b>Wednesday</b>	<b>40</b>	<b>150</b>	<b>90</b>	<b>110</b>	<b>300</b>
<b>Thursday</b>	<b>130</b>	<b>70</b>	<b>220</b>	<b>170</b>	<b>100</b>
<b>Friday</b>	<b>130</b>	<b>100</b>	<b>120</b>	<b>150</b>	<b>190</b>

1. How many Cheese and Onion and Ready Salted crisps were sold on Monday?
2. How many Quavers and Wotsits were sold on Tuesday?
3. How many Salt and Vinegar and Quavers were sold on Thursday?
4. How many Wotsits were sold on Wednesday and Thursday?
5. How many Salt and Vinegar crisps were sold in the final 3 days of the week?
6. How many Cheese and Onion crisps were sold on Thursday and Friday?
7. How many Quavers were sold on Thursday and Friday?
8. How many Ready Salted Crisps were sold on Monday Tuesday and Wednesday?
9. How many Cheese and Onion were sold in the whole week?
10. How many Wotsits were sold on Monday and Friday?

# Cracking Crisps B

	<b>Cheese and Onion</b>	<b>Ready Salted</b>	<b>Salt and Vinegar</b>	<b>Quavers</b>	<b>Wotsits</b>
<b>Monday</b>	<b>120</b>	<b>100</b>	<b>200</b>	<b>250</b>	<b>150</b>
<b>Tuesday</b>	<b>50</b>	<b>120</b>	<b>130</b>	<b>140</b>	<b>200</b>
<b>Wednesday</b>	<b>40</b>	<b>150</b>	<b>90</b>	<b>110</b>	<b>300</b>
<b>Thursday</b>	<b>130</b>	<b>70</b>	<b>220</b>	<b>170</b>	<b>100</b>
<b>Friday</b>	<b>130</b>	<b>100</b>	<b>120</b>	<b>150</b>	<b>190</b>

1. How many more Cheese and Onion crisps were sold on Monday than Tuesday?
2. How many more Quavers were sold on Tuesday than Wednesday?
3. How many more Wotsits were sold on Wednesday than Tuesday?
4. How many more Salt and Vinegar crisps were sold on Monday than Friday?
5. How many more Quavers than Cheese and Onion were sold on Monday?
6. How many more Salt and Vinegar than Cheese and Onion were sold on Thursday?
7. How many less Cheese and Onion than Ready Salted were sold on Wednesday?
8. How many less Salt and Vinegar than Ready Salted were sold on Wednesday?
9. How many less Cheese and Onion than Quavers were sold on Monday?
10. How many less Salt and Vinegar than Wotsits were sold on Wednesday?

## *Extension*

*Find out how many crisps were sold on each day.*

*Find out how many crisps of each flavour were sold.*



# Cracking Crisps A

	<b>Cheese and Onion</b>	<b>Ready Salted</b>	<b>Salt and Vinegar</b>	<b>Quavers</b>	<b>Wotsits</b>
<b>Monday</b>	<b>56</b>	<b>119</b>	<b>80</b>	<b>37</b>	<b>58</b>
<b>Tuesday</b>	<b>50</b>	<b>57</b>	<b>86</b>	<b>94</b>	<b>38</b>
<b>Wednesday</b>	<b>46</b>	<b>121</b>	<b>87</b>	<b>94</b>	<b>54</b>
<b>Thursday</b>	<b>65</b>	<b>34</b>	<b>63</b>	<b>58</b>	<b>77</b>
<b>Friday</b>	<b>86</b>	<b>88</b>	<b>75</b>	<b>47</b>	<b>34</b>

1. How many Cheese and Onion and Ready Salted crisps were sold on Monday?
2. How many Quavers and Wotsits were sold on Tuesday?
3. How many Salt and Vinegar and Quavers were sold on Thursday?
4. How many Wotsits were sold on Wednesday and Thursday?
5. How many Salt and Vinegar crisps were sold in the final 3 days of the week?
6. How many Cheese and Onion crisps were sold on Thursday and Friday?
7. How many Quavers were sold on Thursday and Friday?
8. How many Ready Salted Crisps were sold on Monday Tuesday and Wednesday?
9. How many Cheese and Onion were sold in the whole week?
10. How many Wotsits were sold on Monday and Friday?

# Cracking Crisps B

	<b>Cheese and Onion</b>	<b>Ready Salted</b>	<b>Salt and Vinegar</b>	<b>Quavers</b>	<b>Wotsits</b>
<b>Monday</b>	<b>120</b>	<b>100</b>	<b>200</b>	<b>250</b>	<b>150</b>
<b>Tuesday</b>	<b>50</b>	<b>120</b>	<b>130</b>	<b>140</b>	<b>200</b>
<b>Wednesday</b>	<b>40</b>	<b>150</b>	<b>90</b>	<b>110</b>	<b>300</b>
<b>Thursday</b>	<b>130</b>	<b>70</b>	<b>220</b>	<b>170</b>	<b>100</b>
<b>Friday</b>	<b>130</b>	<b>100</b>	<b>120</b>	<b>150</b>	<b>190</b>

1. How many more Cheese and Onion crisps were sold on Monday than Tuesday?
2. How many more Quavers were sold on Tuesday than Wednesday?
3. How many more Wotsits were sold on Wednesday than Tuesday?
4. How many more Salt and Vinegar crisps were sold on Monday than Friday?
5. How many more Quavers than Cheese and Onion were sold on Monday?
6. How many more Salt and Vinegar than Cheese and Onion were sold on Thursday?
7. How many less Cheese and Onion than Ready Salted were sold on Wednesday?
8. How many less Salt and Vinegar than Ready Salted were sold on Wednesday?
9. How many less Cheese and Onion than Quavers were sold on Monday?
10. How many less Salt and Vinegar than Wotsits were sold on Wednesday?

## *Extension*

*Find out how many crisps were sold on each day.*

*Find out how many crisps of each flavour were sold.*

# Book Fair Takings

	Monday	Tuesday	Wednesday	Thursday	Friday
Rec	12	24	23	23	24
Y1	22	12	23	15	12
Y2	21	21	34	23	26
Y3	33	23	21	24	34
Y4	21	12	14	15	22
Y5	25	31	21	25	21
Y6	17	24	13	26	27

1. How much money did Reception spend on Monday and Tuesday?
2. How much money did Y1 spend on Tuesday and Thursday?
3. How much money did Y3 spend on Wednesday and Friday?
4. How much money did Y1 and Y2 spend on Friday?
5. How much money did Y3 and Y6 spend on Monday?
6. How much money did Y5 and Y6 spend on Wednesday?
7. How much money did the infants spend on Monday?
8. How much did the Juniors spend on Monday?

## CHALLENGE

Work out how much money was spent on each day !!!

Work out how much money each class spent!!

# Book Fair Takings

	Monday	Tuesday	Wednesday	Thursday	Friday
Rec	26	24	33	43	34
Y1	32	32	23	15	32
Y2	21	31	34	43	26
Y3	43	43	21	24	34
Y4	21	12	14	15	32
Y5	45	31	21	25	41
Y6	37	24	13	26	27

1. How much money did Reception spend on Monday and Tuesday?
2. How much money did Y1 spend on Tuesday and Thursday?
3. How much money did Y3 spend on Wednesday and Friday?
4. How much money did Y1 and Y2 spend on Friday?
5. How much money did Y3 and Y6 spend on Monday?
6. How much money did Y5 and Y6 spend on Wednesday?
7. How much money did the infants spend on Monday?
8. How much did the Juniors spend on Monday?


## CHALLENGE

Work out how much money was spent on each day !!!

Work out how much money each class spent!!

# Book Fair Takings

	Monday	Tuesday	Wednesday	Thursday	Friday
Rec	46	24	33	43	34
Y1	32	32	23	65	32
Y2	21	51	34	43	26
Y3	43	43	71	34	34
Y4	21	42	74	75	32
Y5	45	31	81	25	41
Y6	67	24	93	26	57



1. How much money did Reception spend on Monday and Tuesday?
2. How much money did Y1 spend on Tuesday and Thursday?
3. How much money did Y3 spend on Wednesday and Friday?
4. How much money did Y1 and Y2 spend on Friday?
5. How much money did Y3 and Y6 spend on Monday?
6. How much money did Y5 and Y6 spend on Wednesday?
7. How much money did the infants spend on Monday?
8. How much did the Juniors spend on Monday?

## CHALLENGE

Work out how much money was spent on each day !!!

Work out how much money each class spent!!




## **Cheapest Café in town!!!!**



	Small	Medium	Large
Drink	10p	15p	20p
Chips	10p	20p	32p
Burger	15p	25p	32p
Maltesers	21p		

How much would you pay for a

- small drink, and medium chips?.....
- large burger and large chips?.....
- Maltesers and a large drink?.....
- small chips and large burger?.....
- small burger and a large drink?.....
- Two medium burgers?.....
- large drink and large burger?.....
- Maltesers and a medium drink?.....
- large drink and a small burger?.....
- medium burger, large drink and maltesers?.....






## **Cheapest Café in town!!!!**



	Small	Medium	Large
Drink	15p	27p	37p
Chips	19p	29p	45p
Burger	21p	32p	63p
Maltesers	25p		

How much would you pay for a

- small drink, and medium chips? .....
- large burger and large chips? .....
- Maltesers and a large drink? .....
- small chips, small drink and large burger? .....
- two small burgers and a large drink? .....
- Maltesers, and two medium burgers? .....
- large drink, chips and burger? .....
- medium chips, Maltesers and a large drink? .....
- medium chips, large drink and a small burger? .....
- medium burger, large drink and maltesers? .....
- Work out the change from a £1 for each item on the list
- Small drink..... Medium Drink.....
- Large drink..... Small chips.....
- Medium chips..... Large chips.....
- Small burger..... Medium burger.....
- Large burger..... Maltesersr.....







# **Cheapest Café in town!!!!**



	Small	Medium	Large
Drink	23p	32p	45p
Chips	22p	38p	57p
Burger	30p	47p	63p
Maltesers	45p		

How much would you pay for a

- small drink, and medium chips? .....
- large burger and large chips? .....
- Maltesers and a large drink? .....
- small chips, small drink and large burger?.....
- two small burgers and a large drink? .....
- Maltesers, and two medium burgers? .....
- large drink, chips and burger? .....
- medium chips, Maltesers and a large drink? .....
- medium chips, large drink and a small burger? .....
- medium burger, large drink and maltesers? .....
- Work out the change from a £1 for each item on the list
- Small drink..... Medium Drink.....
- Large drink..... Small chips.....
- Medium chips..... Large chips.....
- Small burger..... Medium burger.....
- Large burger..... Maltesersr.....









## **Cheapest Café in town!!!!**



	Small	Medium	Large
Drink	£1.10	£1.30	£1.70
Chips	22p	38p	57p
Burger	30p	47p	63p
Maltesers	£1.25		

How much would you pay for a

- small drink, and medium chips? .....
- large burger and large chips? .....
- Maltesers and a large drink? .....
- small chips, small drink and large burger? .....
- two small burgers and a large drink? .....
- Maltesers, and two medium burgers? .....
- large drink, chips and burger? .....
- medium chips, Maltesers and a large drink? .....
- medium chips, large drink and a small burger? .....
- medium burger, large drink and maltesers? .....
- Work out the change from a £1 for each item on the list
- Small drink..... Medium Drink.....
- Large drink..... Small chips.....
- Medium chips..... Large chips.....
- Small burger..... Medium burger.....
- Large burger..... Maltesersr.....





## ***Cheapest Café in town!!!!***





	Small	Medium	Large
Drink	9p	15p	22p
Chips	10p	20p	32p
Burger	15p	25p	32p
Maltesers	20p		

How much would you pay for a

- small drink, and medium chips?
- large burger and large chips?
- Maltesers and a large drink?
- small chips, small drink and large burger?
- two small burgers and a large drink?
- Maltesers, and two medium burgers?
- large drink, chips and burger?
- medium chips, Maltesers and a large drink?
- medium chips, large drink and a small burger?
- medium burger, large drink and maltesers?

THINK ABOUT IT!!!!

- How many different things can I buy for £1?
- How many different things can I buy for £2?





## ***Cheapest Café in town!!!!***




	Small	Medium	Large
Drink	15p	27p	37p
Chips	19p	29p	45p
Burger	21p	32p	63p
Maltesers	25p		

How much would you pay for a

- small drink, and medium chips?
- large burger and large chips?
- Maltesers and a large drink?
- small chips, small drink and large burger?
- two small burgers and a large drink?
- Maltesers, and two medium burgers?
- large drink, chips and burger?
- medium chips, Maltesers and a large drink?
- medium chips, large drink and a small burger?
- medium burger, large drink and maltesers?

THINK ABOUT IT!!!!

- How many different things can I buy for £1?
- How many different things can I buy for £2?





## ***Cheapest Café in town!!!!***





	Small	Medium	Large
Drink	23p	32p	45p
Chips	22p	38p	57p
Burger	30p	47p	63p
Maltesers	45p		

How much would you pay for a

- small drink, and medium chips?
- large burger and large chips?
- Maltesers and a large drink?
- small chips, small drink and large burger?
- two small burgers and a large drink?
- Maltesers, and two medium burgers?
- large drink, chips and burger?
- medium chips, Maltesers and a large drink?
- medium chips, large drink and a small burger?
- medium burger, large drink and maltesers?

THINK ABOUT IT!!!!

- How many different things can I buy for £1?
- How many different things can I buy for £2?



# Adding a pair of two digit numbers

	Smokey Bacon	Quavers	Ready Salted	Cheese and Onion	Beef	Salt and Vinegar
Monday	15	23	37	16	45	23
Tuesday	16	19	23	45	21	27
Wednesday	24	55	63	75	34	92
Thursday	45	87	34	89	32	19
Friday	23	54	72	89	24	63

1. How many Smokey Bacon and Cheese and Onion crisps were sold on Monday?
2. How many Beef and Quavers crisps were sold on Thursday?
3. How many Ready Salted and Salt and Vinegar were sold on Friday?
4. How many Ready Salted were sold on the first two days?
5. How many Cheese and Onion were sold on the last two days of the week?
6. How many Smokey Bacon were sold on Wednesday and Thursday?
7. How many Beef were sold on the last two days of the week?
8. How many Quavers were sold on the first three days of the week?
9. On two days there were 55 packets of Beef sold. Which two days?
10. On two days there were 68 Smokey Bacon crisps sold. Which two days?

	Small	Medium	Large
Fries	45p	57p	69p
Burger	53p	67p	86p
Drink	33p	46p	58p
Ice cream	25p	36p	51p

How much does it cost for:

- Small fries and a medium drink
- Medium burger and large ice cream
- Large drink and large fries
- Large drink and small ice cream
- Medium burger and large fries
- Large burger, large fries and a small ice cream.
- What MEDIUM items have I bought if I spent 82p?
- What large items have I bought if I spent £1.44?

# Adding a pair of two digit numbers

	Smokey Bacon	Quavers	Ready Salted	Cheese and Onion	Beef	Salt and Vinegar
Monday	134	124	137	116	145	123
Tuesday	126	139	203	145	121	207
Wednesday	224	255	163	175	134	192
Thursday	145	287	134	189	232	219
Friday	222	154	272	189	234	163

1. How many Smokey Bacon and Cheese and Onion crisps were sold on Monday?
2. How many Beef and Quavers crisps were sold on Thursday?
3. How many Ready Salted and Salt and Vinegar were sold on Friday?
4. How many Ready Salted were sold on the first two days?
5. How many Cheese and Onion were sold on the last two days of the week?
6. How many Smokey Bacon were sold on Wednesday and Thursday?
7. How many Beef were sold on the last two days of the week?
8. How many Quavers were sold on the first three days of the week?
9. On two days there were 366 packets of Beef sold. Which two days?
10. On two days there were 269 Smokey Bacon crisps sold. Which two days?

	Small	Medium	Large
Fries	90p	£1.29	£1.66
Burger	£1.10	£1.59	£2.15
Drink	80p	£1.10	£1.67
Ice cream	£1.29	£1.77	£1.98

How much does it cost for:

- Small fries and a medium drink
- Medium burger and large ice cream
- Large drink and large fries
- Large drink and small ice cream
- Medium burger and large fries
- Large burger, large fries and a small ice cream.
- What MEDIUM items have I bought if I spent £3.06?
- What large items have I bought if I spent £3.65?

# Adding a pair of two digit numbers

	Smokey Bacon	Quavers	Ready Salted	Cheese and Onion	Beef	Salt and Vinegar
Monday	15	23	37	16	45	23
Tuesday	16	19	23	45	21	27
Wednesday	24	55	33	39	34	54
Thursday	45	24	34	27	32	19
Friday	23	54	72	36	24	63

- How many Smokey Bacon and Cheese and Onion crisps were sold on Monday?
- How many Beef and Quavers crisps were sold on Thursday?
- How many Ready Salted and Salt and Vinegar were sold on Friday?
- How many Ready Salted were sold on the first two days?
- How many Cheese and Onion were sold on the last two days of the week?
- How many Smokey Bacon were sold on Wednesday and Thursday?
- How many Beef were sold on the last two days of the week?
- How many Quavers were sold on the first three days of the week?
- On two days there were 56 packets of Beef sold. Which two days?
- On two days there were 68 Smokey Bacon crisps sold. Which two days?

	Small	Medium	Large
Fries	45p	57p	69p
Burger	53p	67p	86p
Drink	33p	46p	58p
Ice cream	25p	36p	51p

How much does it cost for:

- Small fries and a medium drink
- Medium burger and large ice cream
- Large drink and large fries
- Large drink and small ice cream
- Medium burger and large fries
- Large burger, large fries and a small ice cream.
- What MEDIUM items have I bought if I spent 82p?
- What large items have I bought if I spent £1.44?

# Adding a pair of two digit numbers

	Smokey Bacon	Quavers	Ready Salted	Cheese and Onion	Beef	Salt and Vinegar
Monday	15	23	22	16	21	14
Tuesday	7	11	13	15	21	27
Wednesday	14	15	10	20	20	13
Thursday	22	17	20	10	11	15
Friday	23	27	25	30	50	20

- How many Smokey Bacon and Cheese and Onion crisps were sold on Monday?
- How many Beef and Quavers crisps were sold on Thursday?
- How many Ready Salted and Salt and Vinegar were sold on Friday?
- How many Ready Salted were sold on the first two days?
- How many Cheese and Onion were sold on the last two days of the week?
- How many Smokey Bacon were sold on Wednesday and Thursday?
- How many Beef were sold on the last two days of the week?
- How many Quavers were sold on the first three days of the week?
- On two days there were 41 packets of Beef sold. Which two days?
- On two days there were 37 Smokey Bacon crisps sold. Which two days?

	Small	Medium	Large
Fries	10p	15p	20p
Burger	12p	18p	24p
Drink	15p	17p	22p
Ice cream	20p	30p	40p

How much does it cost for:

- Small fries and a medium drink
- Medium burger and large ice cream
- Large drink and large fries
- Large drink and small ice cream
- Medium burger and large fries
- Large burger, large fries and a small ice cream.
- What MEDIUM items have I bought if I spent 48p?
- What large items have I bought if I spent 62p?



## **List of links for Year 4 Web page**

Year 4 curriculum statements

<https://www.rosewoodacademy.co.uk/key-information/curriculum/target-tracker-targets>

### **Maths**

<https://www.topmarks.co.uk/>

<https://www.topmarks.co.uk/maths-games/hit-the-button>

<https://trockstars.com/>

<https://mathsframe.co.uk/>

<https://www.mathshed.com/en-gb/>

<https://www.iseemaths.com/>

<https://www.mathsisfun.com/>

### **English**

<https://www.edshed.com/en-gb/>

<https://www.bbc.co.uk/programmes/p007g5y4>

<https://www.bbc.co.uk/bitesize/subjects/zv48q6f>

<https://learnenglishkids.britishcouncil.org/>

### **Science**

BBC Bitesize (KS2)

The National Academy (KS2)

STEM | Home Learning Resources

