

# Year 2 Term 2 Homelearning

Please choose one task a week for Term 2. When you have finished you can upload a picture/video of your home learning onto our class stream or on the homelearning assignment. We are looking forward to seeing what you get up to! We will share our home learning in class 😊 Remember to read 5 x a week and record this in your reading record book.

## English – Phonics, writing and reading.

1. On Spelling Shed complete your weekly assignments.
2. Practice spelling words from last term's phonics (see list below)
3. Create a Space poem (acrostic)  
S is for stars that sparkle in the sky..  
P is for..
4. Complete the attached reading comprehension about space.

## Maths

1. Spend some time on TT rockstars practicing your times tables!
2. Complete the attached White Rose Maths booklet.
3. Practice writing out your number bonds to 10 and 20.
4. Write your own space themed Maths question using your number bonds.



The rocket can hold 20 aliens. 11 aliens are already on the rocket. many more can fit on the rocket?

## Computing

Research the different planets and create an informative poster, presentation or leaflet about the planets you've researched.

## Speaking and listening

Ask an adult what they know about Space. Can they share an interesting fact with you that you can then share with the class? Perhaps you know an adult who was around when the first moon landing happened that you could speak to?

## Wellbeing

Take the time to look at the stars in the evening. What do you notice? Can you see any constellations? How does it make you feel looking up at the sky in the evening?



## Art

Create a space themed piece of Art. Use whichever material you'd like... it could be a painting, collage, sketching or even a computerised piece of Art.

## DT

Create something 3D that you relate to space i.e. Rocket, astronaut, planet, alien, star etc.. This could be made from natural or man made materials.

## Mindfulness

Spend a quiet moment reflecting on your week. Watch 'Sitting like a frog' on YouTube or have a go at a Cosmic yoga video.



## Spellings based on Term 1's phonics – phase 5 review.

/ai/ acorn eight aim ape straight amazing play weigh they

/ee/ each even repair field these she key bee cookie happy

/igh/ item python quiet fried sigh reply wise

/oa/ over oak own nose pony bowl shoulder toe crow

/oo/ and /yoo/ unicorn use zoo jewel cruel group flute blue

# The Planet Zog ★

## 5 What Does It Look Like?

14 The planet Zog is a gigantic, brown planet that  
22 floats 400 million light years away from Earth.  
30 The planet's surface is made of chocolate and  
33 lumpy cream cheese.

## 36 Who Lives There?

45 The creatures that live on Zog are called zargles.  
53 They are strange, furry aliens with nine eyes,  
62 a lion's mane and a horse's tail. They also  
72 have a horn, just like a unicorn, right in the  
79 middle of their fluffy faces. What odd-looking  
82 monsters they are!

90 Would you like to visit the planet Zog? ★★



## Quick Questions



1. What two things is Zog made of?

---



2. Which adjective has the author used to show that zargles are peculiar to look at?

---



3. How long do you think it would take to get to planet Zog?

---

---

---



4. Would you like to visit planet Zog? Why or why not?

---

---

---

---

# 2

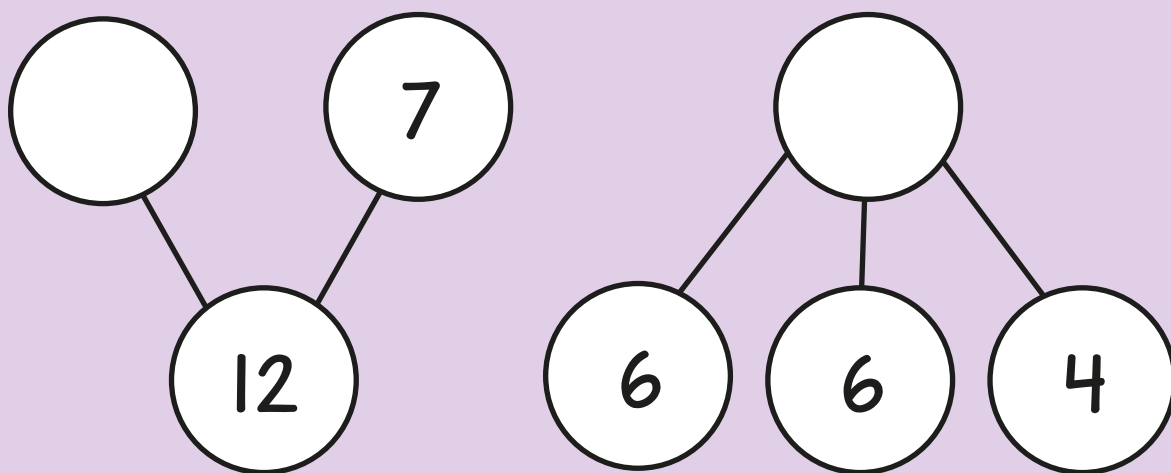
## ADDITION AND SUBTRACTION

White  
Rose  
Maths

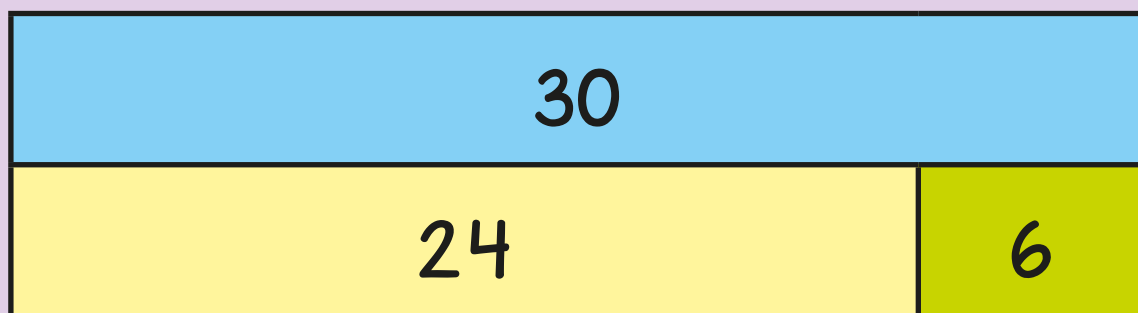


From White Rose Maths schemes for Year 2 Autumn Term  
**BLOCK 2 - ADDITION AND SUBTRACTION**

- 1 Complete the part-whole models.




- 2 Use the bar model to complete the number sentences.

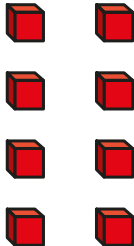
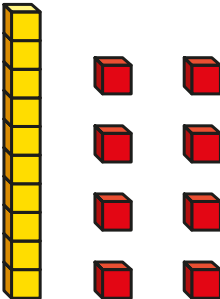


$$6 + \square = 30$$


$$\square - \square = 24$$



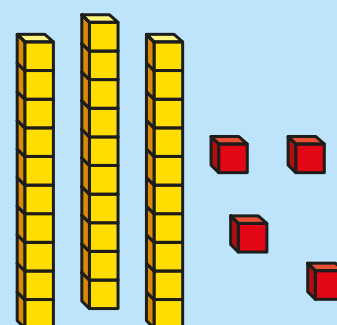
3 Complete the table.

| 10 less   | Number  | 10 more |
|---|---|---------|
|  |  |         |
|   | eighteen  |         |

4 Mo makes this number.



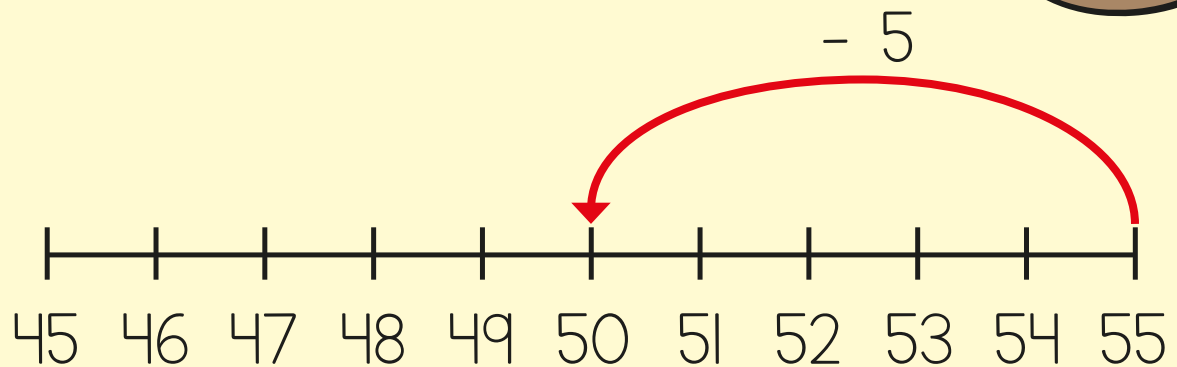

Annie makes this number.



What is the total of their numbers?

5 Amir is working out  $55 - 9$

He uses a number line.




How many more does Amir need to subtract?

What is the answer to  $55 - 9$ ?

6 Sam has 30 grapes.

She eats 14 grapes.

How many grapes are left?



- 7 Circle **two** numbers that total 100

32    42    52    58    68    78


- 8 Here are three digit cards.



Use the cards to find two different ways to complete the number sentence.

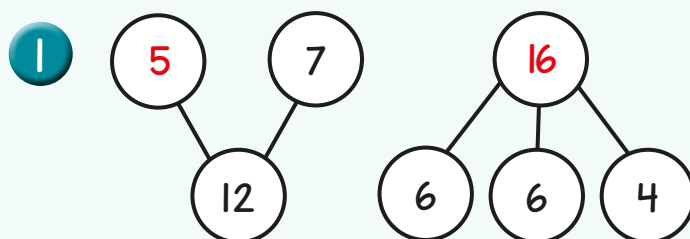
$$\square + \square \square = 65$$

$$\square + \square \square = 65$$





# Answers



2

$$6 + 24 = 30$$

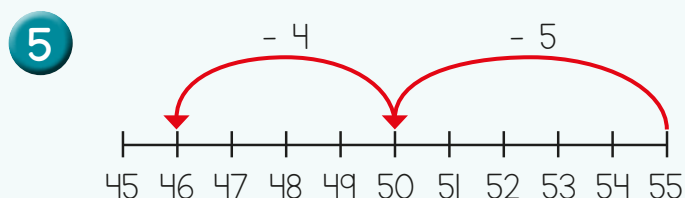
$$30 - 6 = 24$$

3

| 10 less | Number   | 10 more      |
|---------|----------|--------------|
|         |          |              |
| eight   | eighteen | twenty-eight |

4

65



Amir needs to subtract 4 more.  
The answer is 46

6

16 grapes

7

(32) (42) 52 (58) (68) 78

8

$$8 + 57 = 65$$

$$7 + 58 = 65$$

