





Year 3 Home Learning Term 3

Complete one home learning task each week and
post on Google Classroom or share in class. ☺ Don't forget to read 5 x a week too!

<p>PSHE Create a bingo list of activities you want to do as a family, by yourself or at school by the end of Term 3. Here are some ideas:</p> <ul style="list-style-type: none"> - Finish a book - Paint a picture - Ride a bike - Bake something <p>How can you link this to our focus this term of 'Dreams and Goals'?</p>	<p>English Last term we were writing Clerihew poems. Can you create one about a family member or a class member. Remember it needs to rhyme, have humour and be short.</p> <p>Spelling Practice the following sentence 3 times. Then put them into silly sentences:</p> <ul style="list-style-type: none"> - committed - forgotten - developing - covered - disappoint - refresh 	<p>Geography Search facts about 2 different mountains that are not in The UK. Can you create a table comparing their similarities and differences.</p> 	<p>Science Our focus this term is sound in Science. Can you create your own instrument to share with us. We are looking forward to seeing what you've used & made.</p> 
<p>Maths Complete the attached questions to practice addition and subtraction of 3 digit numbers.</p> <p>Challenge your class teacher on TTRS.</p> <p>Complete your set assignments on Maths shed.</p> <p>Play Daily 10 to practice 6 and 8 x tables.</p>	<p>Reading Look at the attached sheet and answer the questions. Write a question for us to answer at the end.</p>	<p>Art This term we are learning about the Romans in History, can you create a piece of Roman Art such as a mosaic?</p> 	<p>Mindfulness Complete the Lunar New Year Cosmic Kids Yoga video on YouTube.</p> <p>Lunar New Year Kids Yoga A Cosmic Kids Yoga Adventure!</p> <p>Go on a colour walk in your local area. Can you find an object for each colour of the rainbow?</p> 

f.					g.					h.				
	3	2	6			4	8	7			5	6	9	
+	4	1	9		+	1	3	3		+	6	5	0	

Huan and Dani each have 252 stickers.

Huan is given an extra 6 stickers.

Dani is given an extra 7 stickers.

Who has more stickers?

Is there more than one way of working it out?

				6.					7.					8.			
3	5	8			4	9	3			6	7	6			7	2	4
	3	5		-		6	2		-	1	2	1		-	2	1	3

$$\begin{array}{r} 353 \\ - 136 \\ \hline \\ \hline \end{array}$$

$$\begin{array}{r} 627 \\ - 258 \\ \hline \\ \hline \end{array}$$

$$\begin{array}{r} 622 \\ - 394 \\ \hline \\ \hline \end{array}$$

$$\begin{array}{r} 951 \\ - 652 \\ \hline \\ \hline \end{array}$$

Ron makes a 3-digit number using the digit cards.



Ron subtracts 50 from his 3-digit number.

What number could Ron have now?

THE FIFTH GOLDEN TICKET

1

'MOTHER!'

11 yelled Charlie, rushing in on them like a hurricane. 'Look!
22 I've got it! Look, Mother, look! The last Golden Ticket! **IT'S**
34 **MINE!** I found some money in the street and I bought two
45 bars of chocolate and the second one had the Golden Ticket
55 and there were *crowds* of people all around me wanting
68 to see it and the shopkeeper rescued me and I ran all the
79 way home and here I am! **IT'S THE FIFTH GOLDEN TICKET,**
84 **MOTHER AND I'VE FOUND IT!**

94 Mrs Bucket simply stood and stared, while the four old
103 grandparents, who were sitting up in bed balancing bowls
114 of soup on their laps, all dropped their spoons with a
120 clatter and froze against their pillows.



CHARLIE AND THE CHOCOLATE FACTORY

Questions

1. Who did Charlie say had rescued him?

2. Why do you think the grandparents dropped their spoons?

3. Find and copy one word which suggests there was a loud noise when some objects fell.

4. Look at the sentence starting **I found some money...**
The author has created a very long sentence. What does this suggest about how Charlie is feeling?

