





















































## Year 4 Home learning Term 1

Complete one task each week and if you would like to you can upload your learning to google classroom to share with your teacher and class.
















<p><b>SCIENCE –</b> What happens to a dirty penny when it is left in different liquids? You will need:</p> <ul style="list-style-type: none"> <li>• Fizzy Drink</li> <li>• Water</li> <li>• Vinegar</li> <li>• Milk</li> <li>• 4 pennies</li> </ul> <p>How long will you leave the penny in the liquid? What do you think will happen? Will the penny change?</p>	<p><b>Art –</b> <b>Tye Dying</b></p> <p>Can you look up different tye dye effects? How are they created? What patterns do they make.</p> 	<p><b>Mindfulness</b></p> <p style="text-align: center;"><b>Sensory Collection</b></p> <p>Find something....</p> <table border="1" style="width: 100%; text-align: center;"> <tbody> <tr> <td style="width: 50%;">  warm or cool  </td> <td style="width: 50%;">  hard or soft  </td> </tr> <tr> <td>  big or small  </td> <td>  rough or smooth  </td> </tr> <tr> <td>  loud or quiet  </td> <td>  bright or dark  </td> </tr> <tr> <td>  heavy or light  </td> <td>  scented or odorless  </td> </tr> </tbody> </table> <p style="font-size: small;">         • What senses did you use to find these objects?          • What is your favorite object?          • What do you like about it?       </p>	 warm or cool 	 hard or soft 	 big or small 	 rough or smooth 	 loud or quiet 	 bright or dark 	 heavy or light 	 scented or odorless 	<p><b>History – The legacy of the Ancient Greeks</b></p> <p>The ancient Greeks invented the Olympics. Can you find out about the Olympics? When did it start? What type of events are there?</p> 
 warm or cool 	 hard or soft 										
 big or small 	 rough or smooth 										
 loud or quiet 	 bright or dark 										
 heavy or light 	 scented or odorless 										
<p><b>Maths – Decimals</b> <b>See worksheets below</b></p> <p>TT Rockstars <a href="https://trockstars.com/">https://trockstars.com/</a></p>  <p><b>Timetable test practice</b> <a href="#">Maths frame</a></p>	<p><b>RE</b></p> <p>Can you create a poster about the Ten things you should know about Hinduism.</p> <p>You can use your learning from last term and this term.</p> <p>What do you think the most important facts are?</p>	<p><b>English-</b></p> <p>Writing a biography. Can you pick a famous person who you could write a biography on? Who are they? What are they famous for? A brief paragraph on how they became the person they are today.</p> <p><b>Spelling</b> :ED Shed <a href="https://www.edshed.com/en-gb/menu">https://www.edshed.com/en-gb/menu</a></p>	<p><b>Geography – Asia</b></p> <p>Who was Marco Polo and what did he achieve? Can you research who he is and write a fact file about him.</p> 								

## Year 4 Home learning Term 1

Complete one task each week and if you would like to you can upload your learning to google classroom to share with your teacher and class.

# Check Your Change from £10

Check the change the shopkeeper has given you.  
Is it the correct amount, or have they made a mistake?

You buy	You pay	Your change	Correct or incorrect?	Correct change required
 £7.50				
 £8.99				
 £9.62				
 £6.79				
 £9.85				

# Year 4 Home learning Term 1

Complete one task each week and if you would like to you can upload your learning to google classroom to share with your teacher and class.

## Money Problems

1) Compare the amounts of money using the  $<$ ,  $>$  and  $=$  signs.

a)



b)



c)







# Year 4 Home learning Term 1

Complete one task each week and if you would like to you can upload your learning to google classroom to share with your teacher and class.



2) Solve the problems.

a) Each person below bought 1 item from the toy shop and paid with a £20 note. What did they buy?

Train – £5.35		
Doll – £8.90		
Teddy Bear – £8.30		
Kite – £9.80		
Roller Blades – £19.11		
Building Blocks – £10.65		
Robot – £9.20		
Playing Cards – £2.43		
Fidget Spinner – £4.40		
Yo-yo – £3.45		
Crayons – £3.78		
Game – £12.23		
Remote-Controlled Car – £12.52		

Hari: I was given £16.22 change.

Joseph: I was given £9.35 change.

Amrit: I was given £11.10 change.


Jia: I was given £11.70 change.



## Year 4 Home learning Term 1

Complete one task each week and if you would like to you can upload your learning to google classroom to share with your teacher and class.



- b) Jia has  to spend. She bought two items from the toy shop.

What is the most money she may have spent and what did she buy?

- c) Drew gets £2.50 pocket money a week. They want to buy the remote-controlled car. How many weeks will it take them to save up enough money to buy the car?

- d) Priya buys some roller blades, a deck of cards and some crayons. How much change does she get if she pays with these notes?



## Year 4 Home learning Term 1

Complete one task each week and if you would like to you can upload your learning to google classroom to share with your teacher and class.




- e) Zeke and Emily are trying to estimate how much change they will get if they pay for the toy train with this much money.



I think we will get approximately £5 change.

I think we will get approximately £4.60 change.



Whose estimate is the most accurate and why?

- f) Elias bought a fidget spinner. He paid with a £20 note and was given £5.60 change. Explain and correct the shopkeepers mistake.



## Year 4 Home learning Term 1

Complete one task each week and if you would like to you can upload your learning to google classroom to share with your teacher and class.




3)

a) Use the clues to work out how much money Priya has in her money box.

The amount of money in my money box is less than £2.00.

It is a multiple of 10p.

One third of the money in my money box is greater than 40p and is a multiple of 5p.



Find all possible solutions.









b) Priya has 5 coins in her money box to make the amount calculated from question 3a). What coins could these be? Find all possible solutions..



## Year 4 Home learning Term 1

Complete one task each week and if you would like to you can upload your learning to google classroom to share with your teacher and class.

# Converting Time Worksheet

Time in Words	24 Hour Clock	12 Hour Clock	Analogue
seven o'clock in the evening	19:00	7:00p.m.	
		11:00a.m.	
	14:15		
		8:20p.m	
midday			
		6:40p.m.	
midnight			
seven minutes to eight at night			

## Year 4 Home learning Term 1

Complete one task each week and if you would like to you can upload your learning to google classroom to share with your teacher and class.

---

---